

## EZ LEARNING / CHALLENGE OF THE WEEK - 2



Plan View



Elevation View

What will be  
Side View of  
this Object ?


## ANSWER FOR EZ LEARNING / CHALLENGE OF THE WEEK - 2




Plan View



Elevation View



Isometric View



Side View

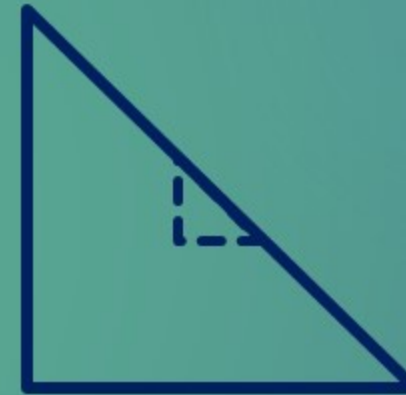
## ANSWER FOR EZ LEARNING / CHALLENGE OF THE WEEK - 2



Plan View



Elevation View



Side View  
Option 2